

Calculus

F 7 September 2012

RESET THE
SESSION

SET THE
PARTICIPANT
LIST

PLUG IN THE
RECEIVER

Boxed answers agree with
TurningPoint answers

Points agree with
TurningPoint points

Points total to 100

Topics covered are in bounds

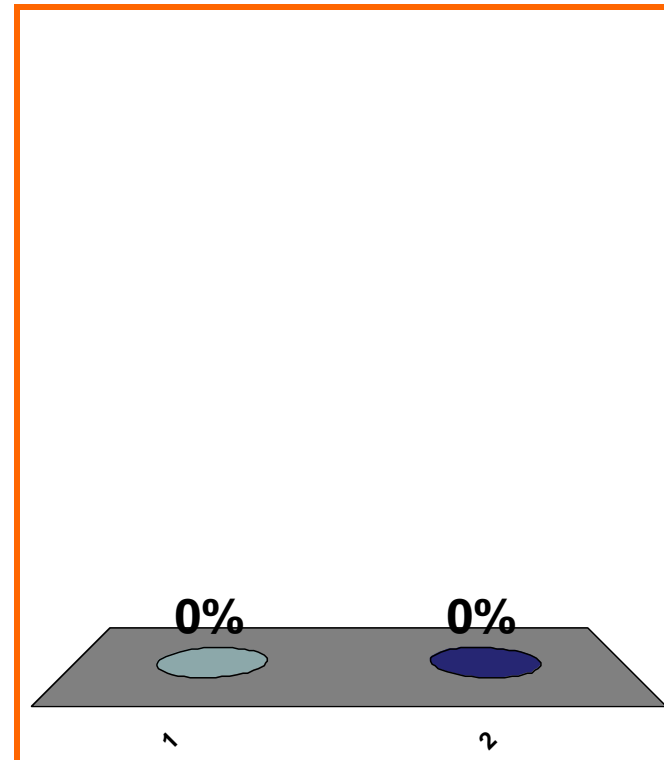
QUIZ
FOLLOWS

T or F:

$$\exists x \in \mathbb{Q} \text{ s.t. } x^2 = 2$$

(a) True

(b) False



1	2	3	4	5	6	7	8	9	10	11	12	13	14	15	16	17	18	19	20
21	22	23	24	25	26	27	28	29	30										

0 of 5

Topic 0010

0 pts

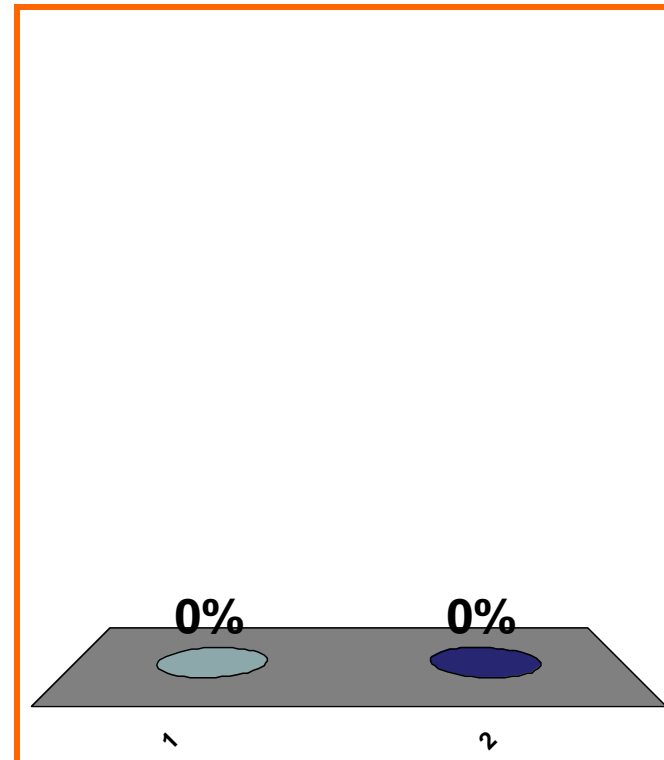
5

T or F:

$$\exists x \in \mathbb{R} \text{ s.t. } x^2 = 2$$

(a) True

(b) False



1	2	3	4	5	6	7	8	9	10	11	12	13	14	15	16	17	18	19	20
21	22	23	24	25	26	27	28	29	30										

0 of 5

Topic 0010

0 pts

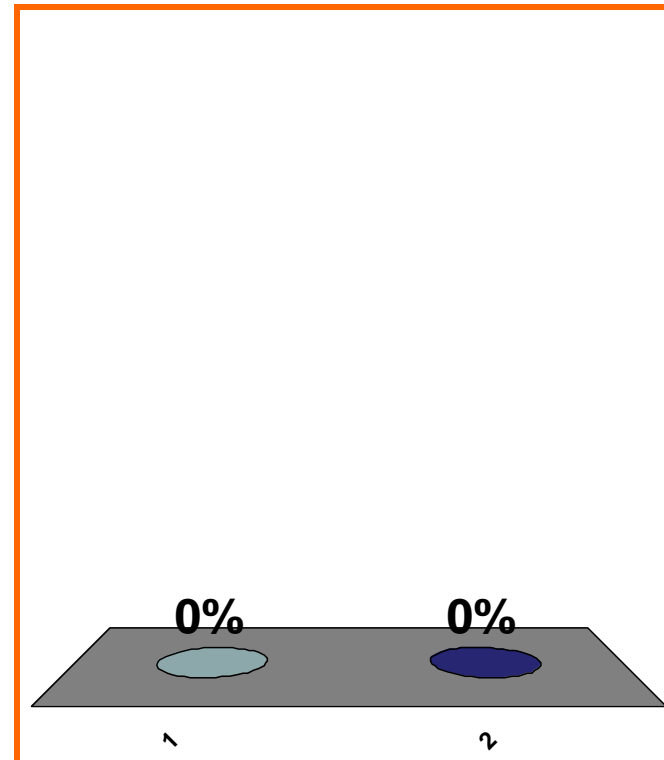
6

T or F:

$$\sqrt{(-5)^2} = -(-5)$$

(a) True

(b) False



1	2	3	4	5	6	7	8	9	10	11	12	13	14	15	16	17	18	19	20
21	22	23	24	25	26	27	28	29	30										

0 of 5

Topic 0050

0 pts

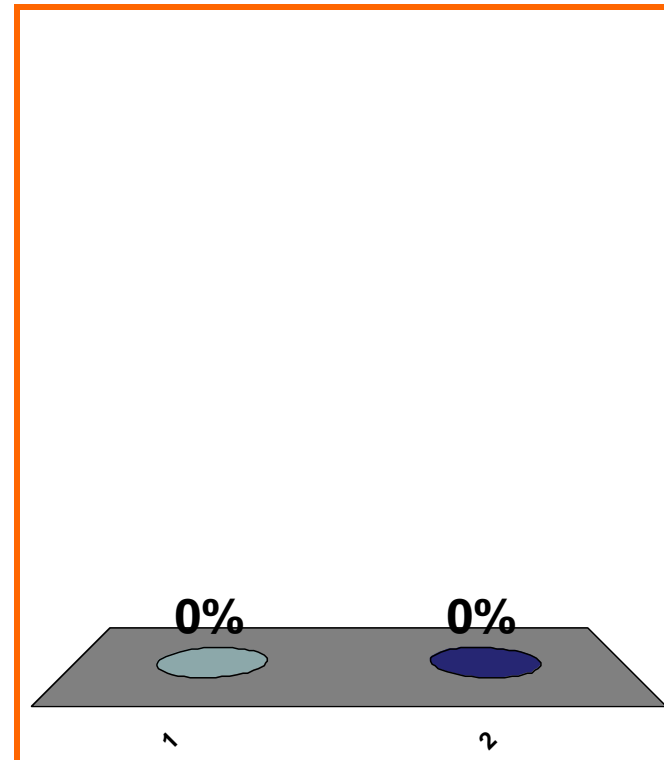
7

T or F:

$$\forall x \in \mathbb{R}, \sqrt{x^2} = x$$

(a) True

(b) False



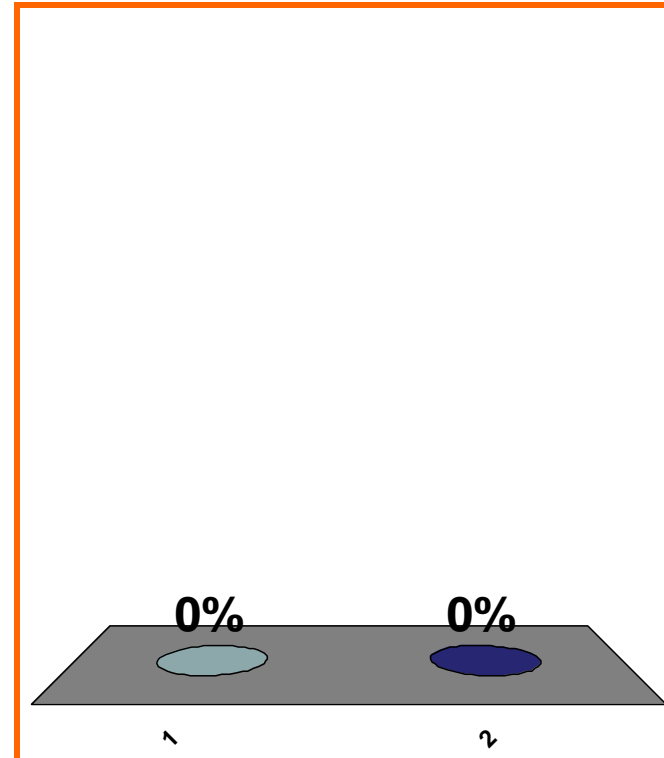
1	2	3	4	5	6	7	8	9	10	11	12	13	14	15	16	17	18	19	20
21	22	23	24	25	26	27	28	29	30										

T or F:

$$\forall x \in \mathbb{R}, \sqrt{x^2} = |x|$$

(a) True

(b) False



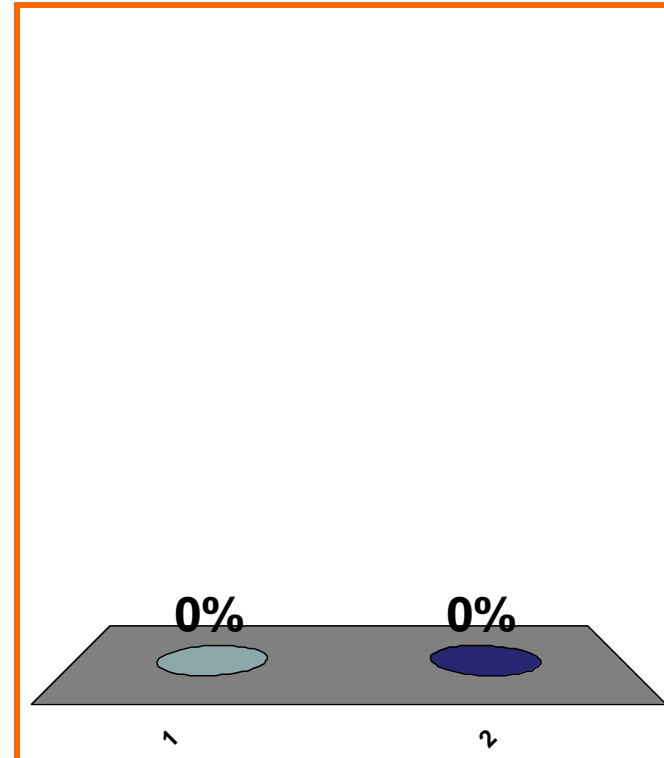
1	2	3	4	5	6	7	8	9	10	11	12	13	14	15	16	17	18	19	20
21	22	23	24	25	26	27	28	29	30										

T or F:

$$\forall x < 0, \sqrt{x^2} = -x$$

(a) True

(b) False



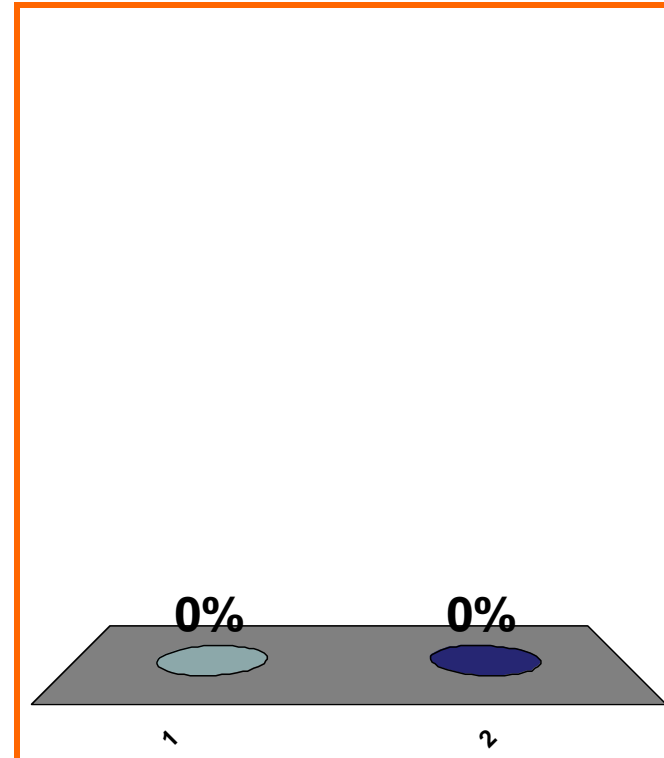
1	2	3	4	5	6	7	8	9	10	11	12	13	14	15	16	17	18	19	20
21	22	23	24	25	26	27	28	29	30										

T or F:

$[-1, \infty)$ is closed

(a) True

(b) False



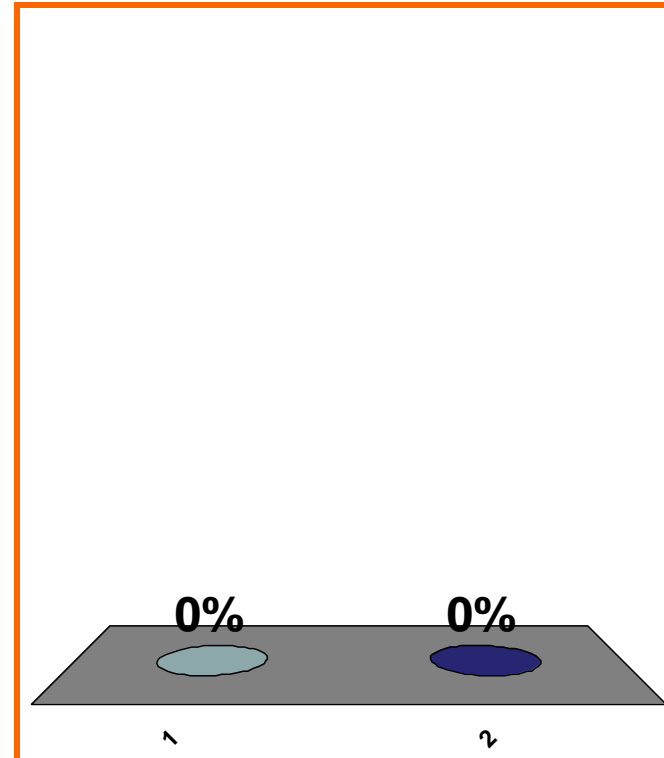
1	2	3	4	5	6	7	8	9	10	11	12	13	14	15	16	17	18	19	20
21	22	23	24	25	26	27	28	29	30										

T or F:

$[-1, 2]$ is compact

(a) True

(b) False



1	2	3	4	5	6	7	8	9	10	11	12	13	14	15	16	17	18	19	20
21	22	23	24	25	26	27	28	29	30										

Domain of \sqrt{x} is ??

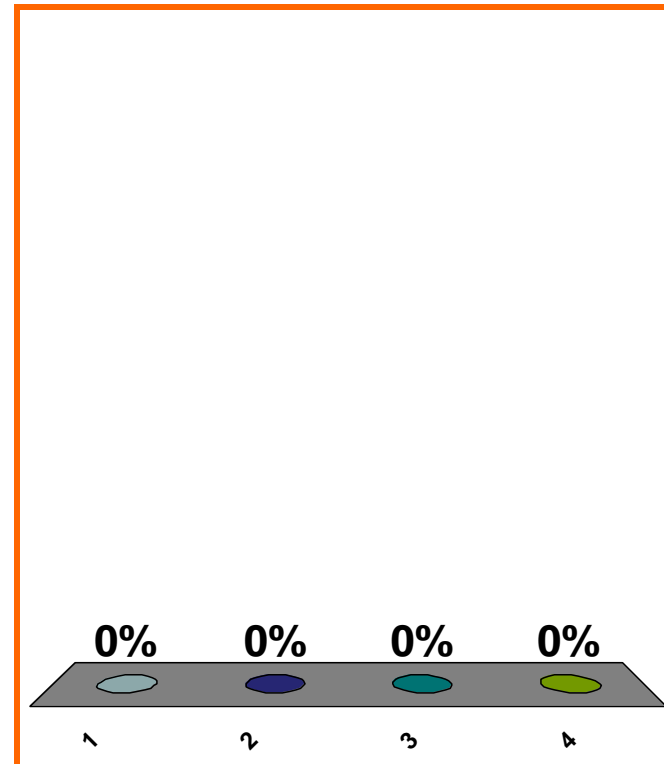
(a) $x \in \mathbb{R}$

(b) $x \in \mathbb{Q}$

(c) $x \in (0, \infty)$

(d) none of the above

Correct answer: $x \in [0, \infty)$



1	2	3	4	5	6	7	8	9	10	11	12	13	14	15	16	17	18	19	20
21	22	23	24	25	26	27	28	29	30										

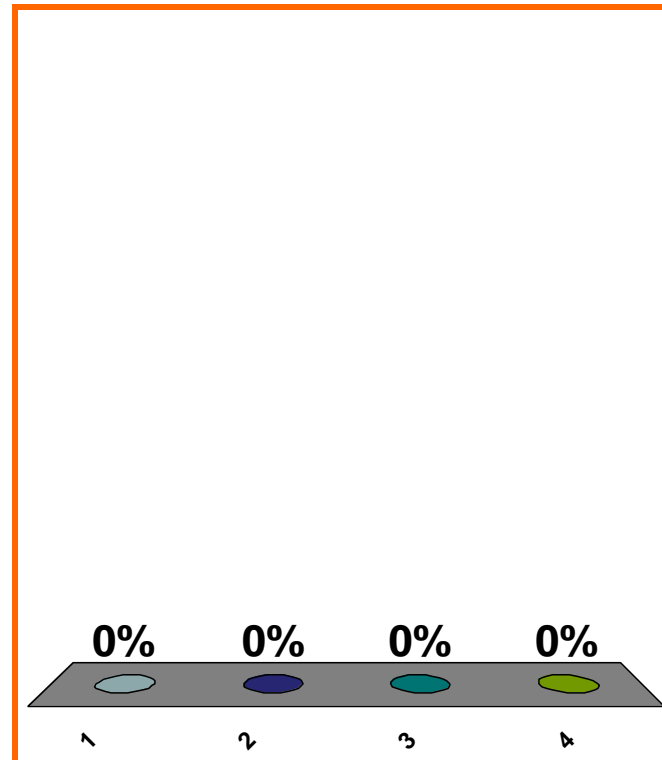
Quartic coefficient in
 $3x^5 + x^4 - x^3 + 8x + \pi$

(a) 1

(b) 3

(c) -1

(d) none of the above



1	2	3	4	5	6	7	8	9	10	11	12	13	14	15	16	17	18	19	20
21	22	23	24	25	26	27	28	29	30										

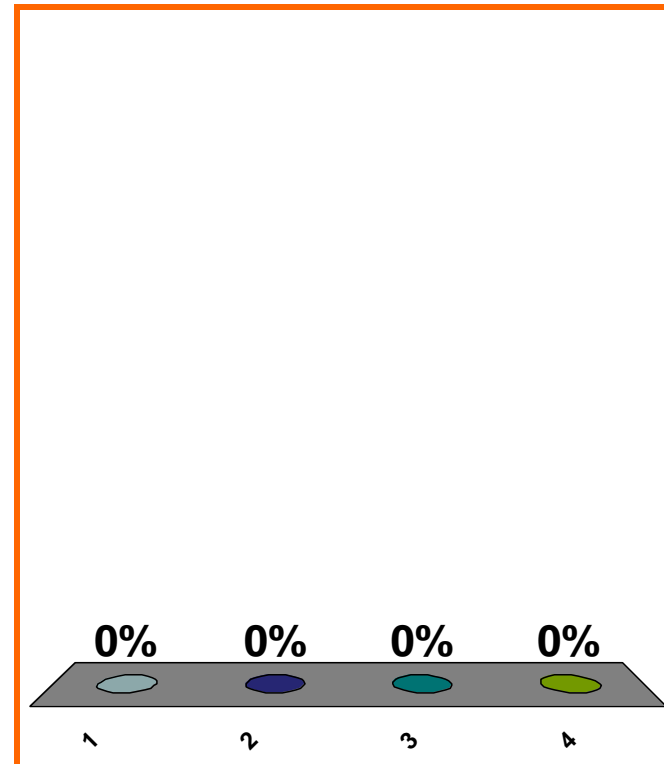
Leading coefficient in
 $3x^5 + x^4 - x^3 + 8x + \pi$

(a) 1

(b) 3

(c) -1

(d) none of the above



1	2	3	4	5	6	7	8	9	10	11	12	13	14	15	16	17	18	19	20
21	22	23	24	25	26	27	28	29	30										

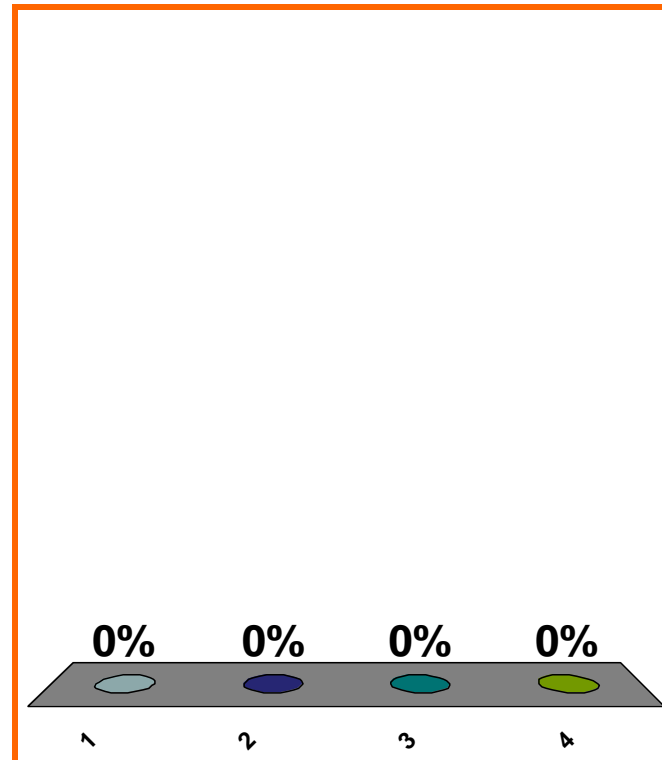
$$x^2 + 3x + 1 \text{ is } ??$$

(a) polynomial

(b) rational, **not** polynomial

(c) algebraic, **not** rational

(d) **none** of the above



1	2	3	4	5	6	7	8	9	10	11	12	13	14	15	16	17	18	19	20
21	22	23	24	25	26	27	28	29	30										

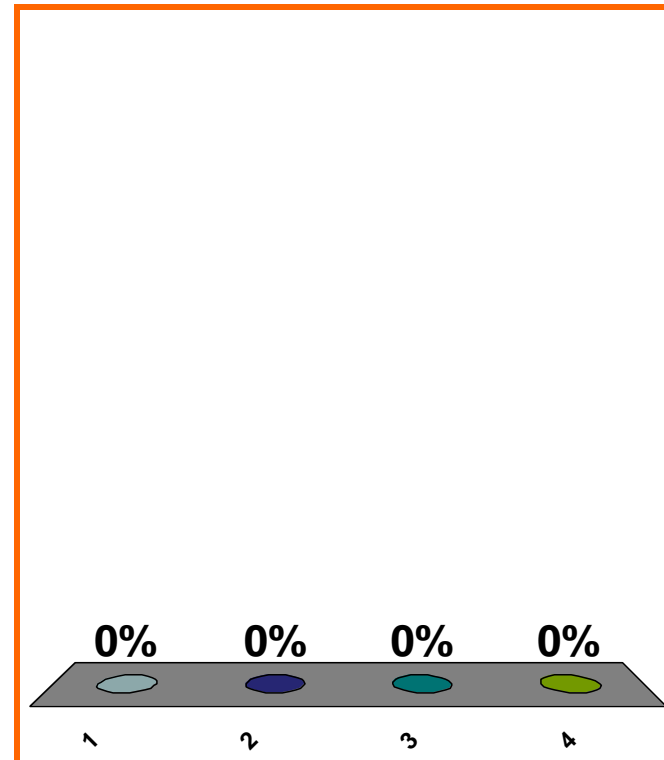
$$x^2 + 3\sqrt{x} + 1 \text{ is ??}$$

(a) polynomial

(b) rational, **not** polynomial

(c) algebraic, **not** rational

(d) **none** of the above



1	2	3	4	5	6	7	8	9	10	11	12	13	14	15	16	17	18	19	20
21	22	23	24	25	26	27	28	29	30										

$\sin x$ is ??

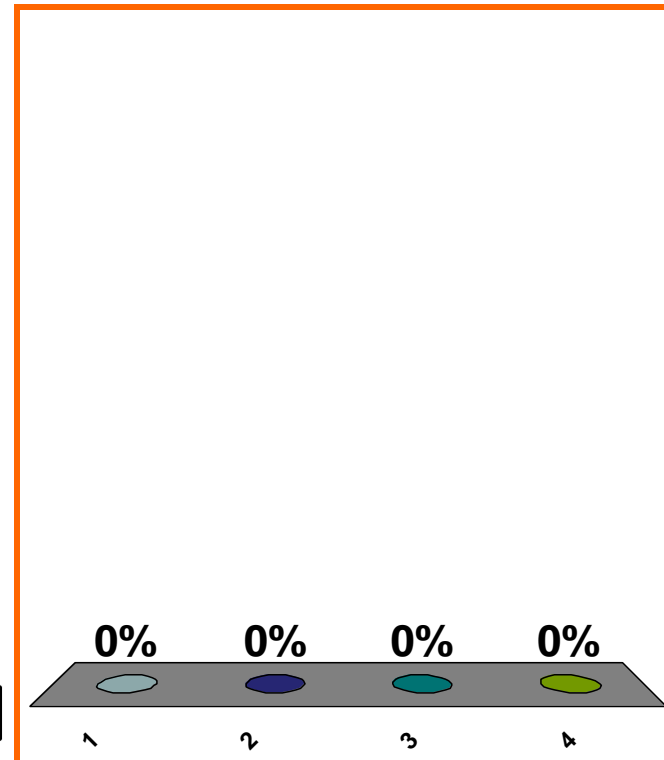
(a) polynomial

(b) rational, **not** polynomial

(c) algebraic, **not** rational

(d) **none** of the above

Correct answer: transcendental



1	2	3	4	5	6	7	8	9	10	11	12	13	14	15	16	17	18	19	20
21	22	23	24	25	26	27	28	29	30										

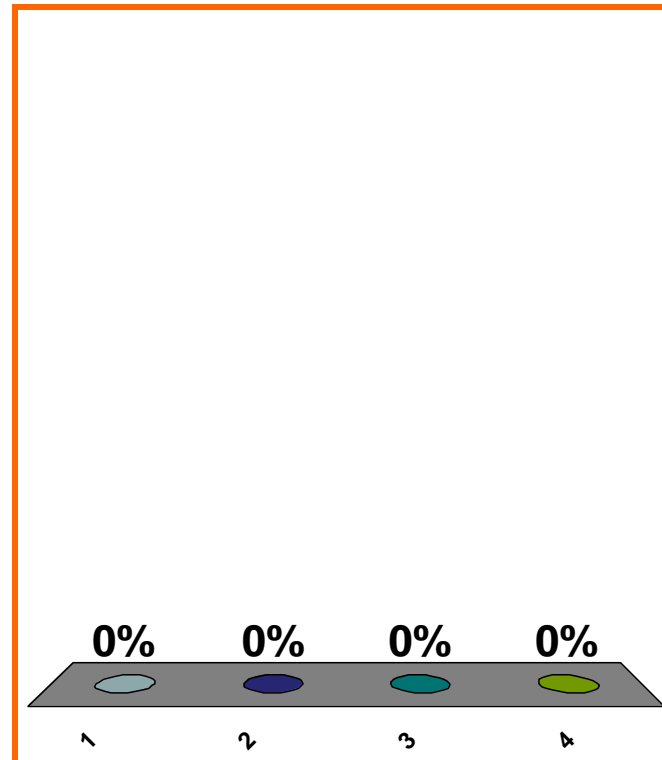
x^{10} is ??

(a) polynomial

(b) rational, **not** polynomial

(c) algebraic, **not** rational

(d) **none** of the above



1	2	3	4	5	6	7	8	9	10	11	12	13	14	15	16	17	18	19	20
21	22	23	24	25	26	27	28	29	30										

10^x is ??

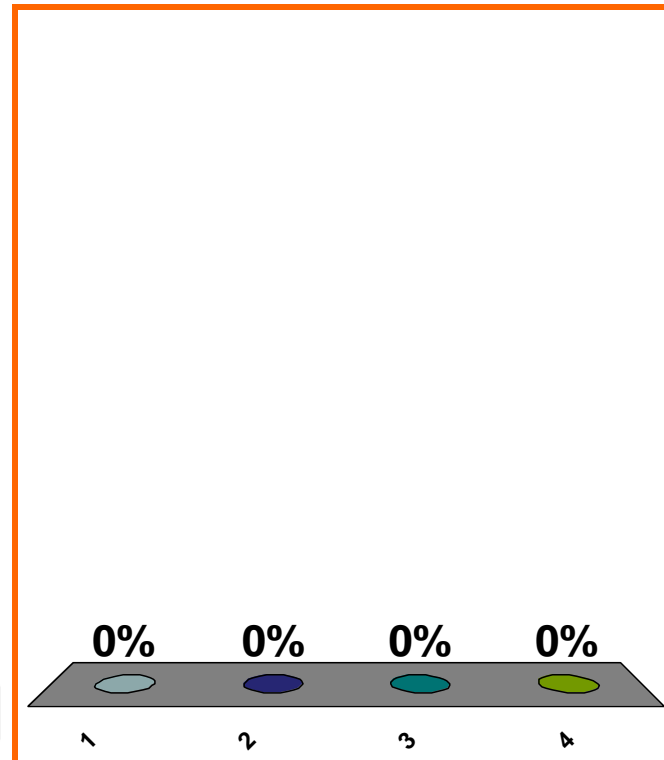
(a) polynomial

(b) rational, **not** polynomial

(c) algebraic, **not** rational

(d) **none** of the above

Correct answer: transcendental



1	2	3	4	5	6	7	8	9	10	11	12	13	14	15	16	17	18	19	20
21	22	23	24	25	26	27	28	29	30										

0 of 5

Topic 0030

0 pts

20

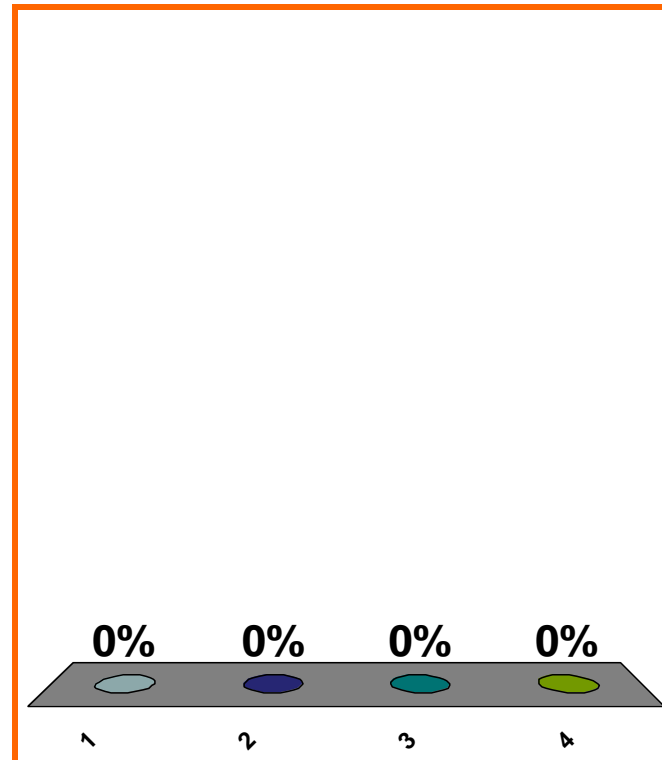
$$\frac{1}{x} \text{ is } ??$$

(a) polynomial

(b) rational, **not** polynomial

(c) algebraic, **not** rational

(d) **none** of the above



1	2	3	4	5	6	7	8	9	10	11	12	13	14	15	16	17	18	19	20
21	22	23	24	25	26	27	28	29	30										

graph intervals
graph neighborhoods
graph punctured neighborhoods
additivity of error

LOOK AHEAD

t^2 rods in t seconds; velocity?
differentiate polynomials
differentiate trig functions

			1							
			1		1					
		1		2		1				
	1		3		3		1			
1		4		6		4		1		

$$(2x - y)^3 = ??$$

(a) $8x^3 - y^3$

(b) $8x^3 + y^3$

(c) $8x^3 - 3(4x^2)y + 3(2x)y^2 - y^3$

(d) none of the above

0%

0%

0%

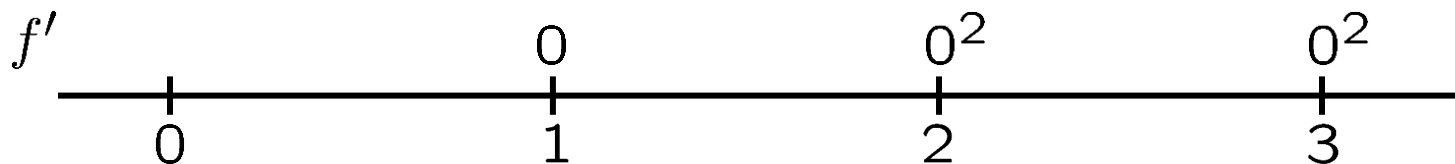
0%

1	2	3	4	5	6	7	8	9	10	11	12	13	14	15	16	17	18	19	20
21	22	23	24	25	26	27	28	29	30										

0 of 5

max interval of pos.

for f , if $f(x) = (x - 1)(x - 2)^2(x - 3)^2$.

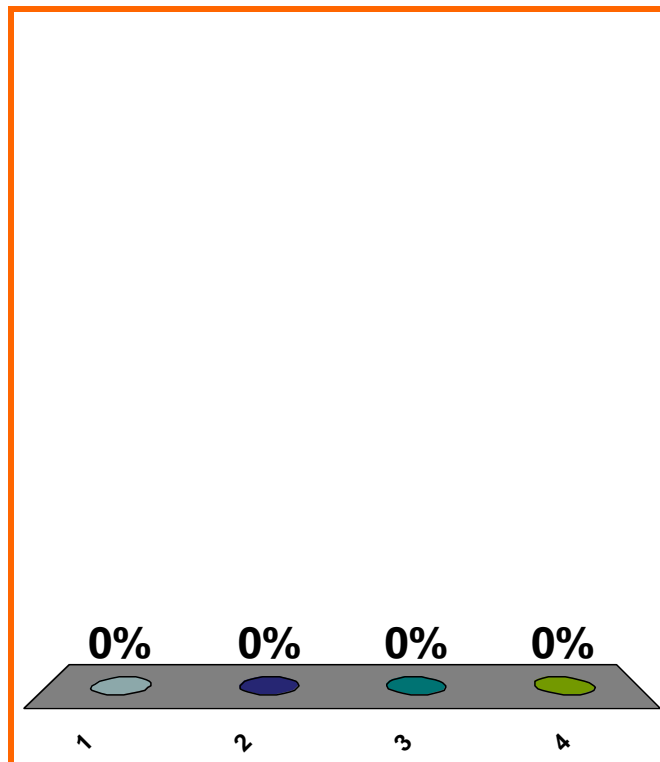


(a) $(0, \infty)$

(b) $(1, \infty)$

(c) $(2, \infty)$

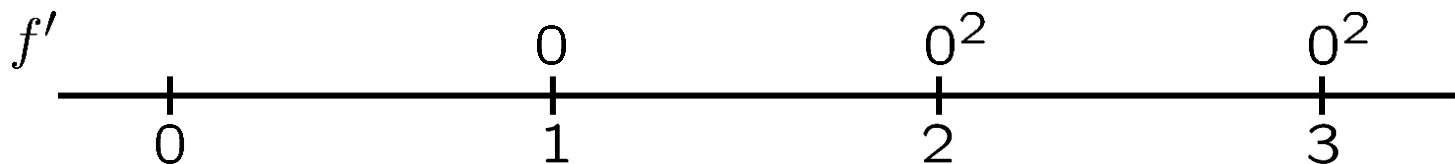
(d) none of the above



1	2	3	4	5	6	7	8	9	10	11	12	13	14	15	16	17	18	19	20
21	22	23	24	25	26	27	28	29	30										

max interval of neg.

for f , if $f(x) = -(x - 1)^2(x - 2)(x - 3)^2$.

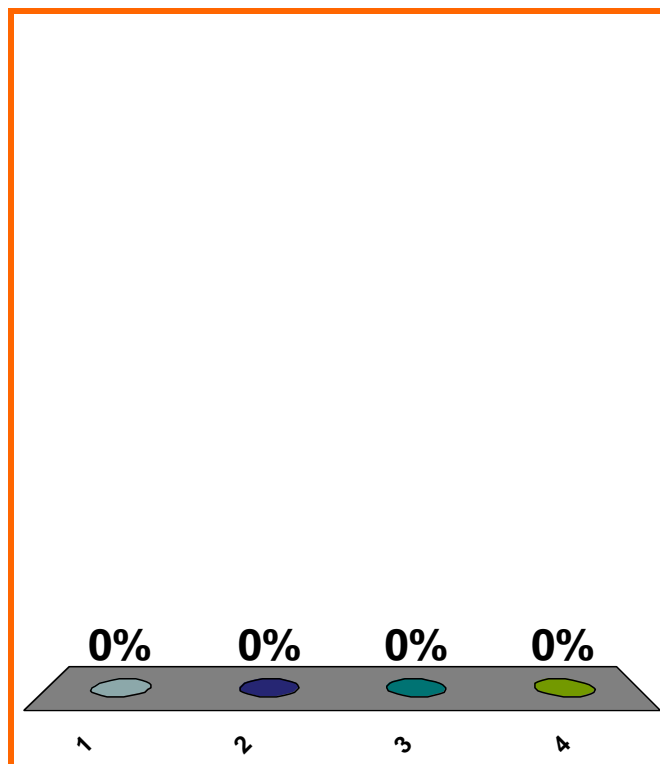


(a) $(0, \infty)$

(b) $(1, \infty)$

(c) $(2, \infty)$

(d) none of the above



1	2	3	4	5	6	7	8	9	10	11	12	13	14	15	16	17	18	19	20
21	22	23	24	25	26	27	28	29	30										

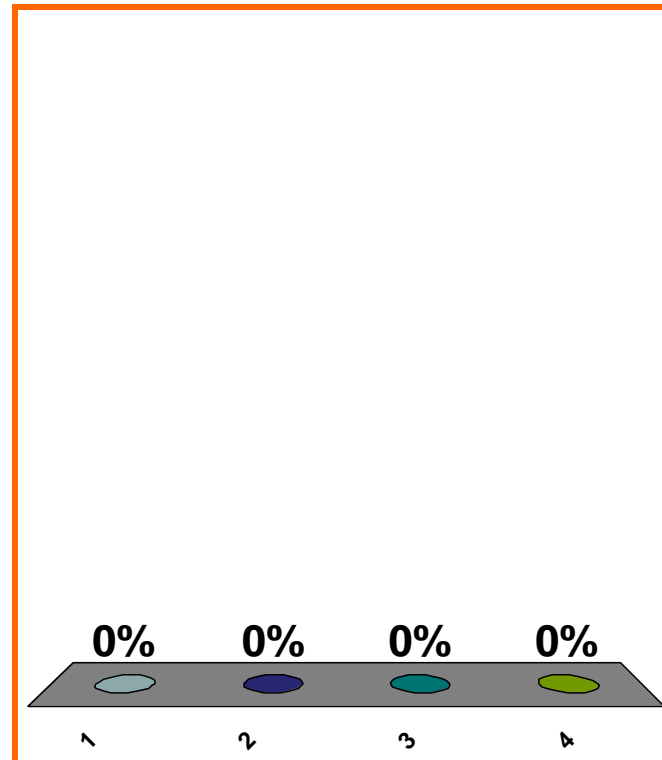
distance from 7 to 9?

(a) 2

(b) -2

(c) 4

(d) none of the above



1	2	3	4	5	6	7	8	9	10	11	12	13	14	15	16	17	18	19	20
21	22	23	24	25	26	27	28	29	30										

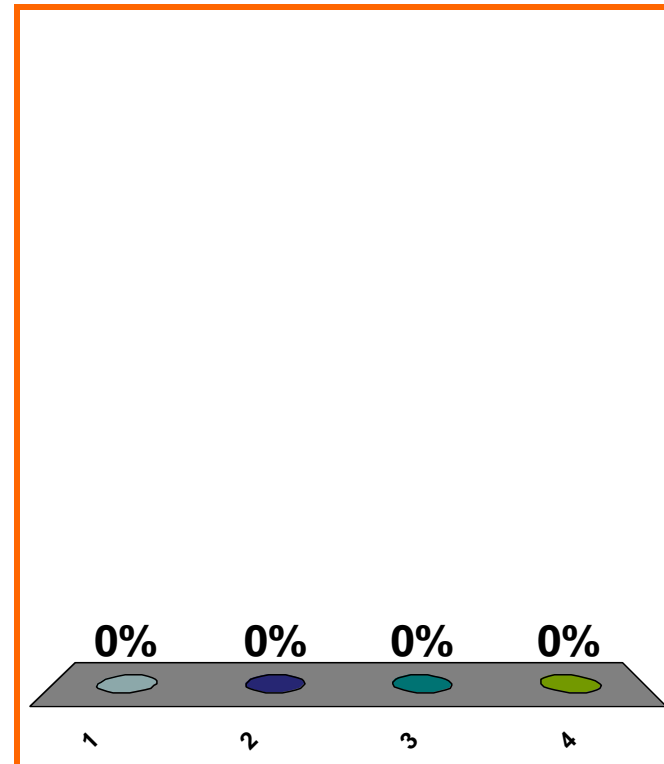
distance from 9 to 7?

(a) 2

(b) -2

(c) 4

(d) none of the above



1	2	3	4	5	6	7	8	9	10	11	12	13	14	15	16	17	18	19	20
21	22	23	24	25	26	27	28	29	30										

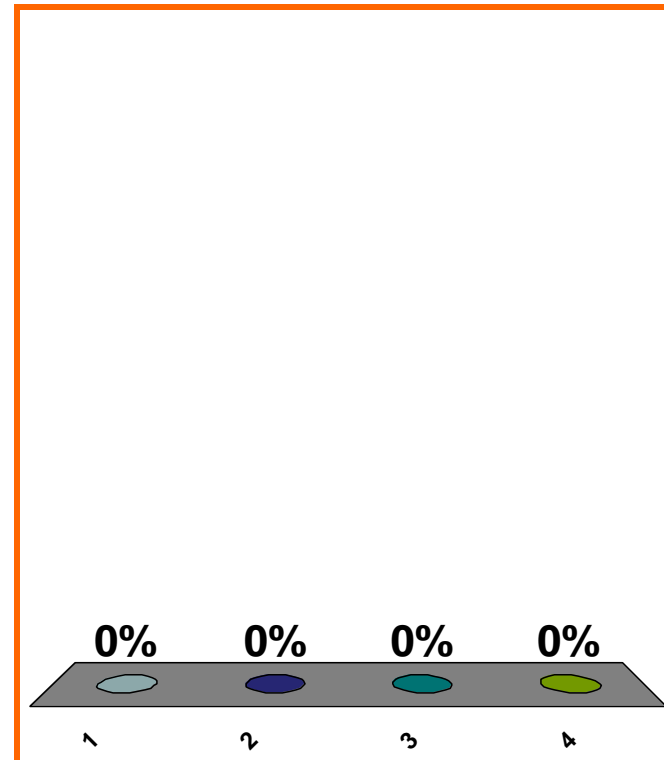
distance from x to 5?

(a) $5 - x$

(b) $|5 - x|$

(c) $x - 5$

(d) none of the above



1	2	3	4	5	6	7	8	9	10	11	12	13	14	15	16	17	18	19	20
21	22	23	24	25	26	27	28	29	30										

distance from a to b ?

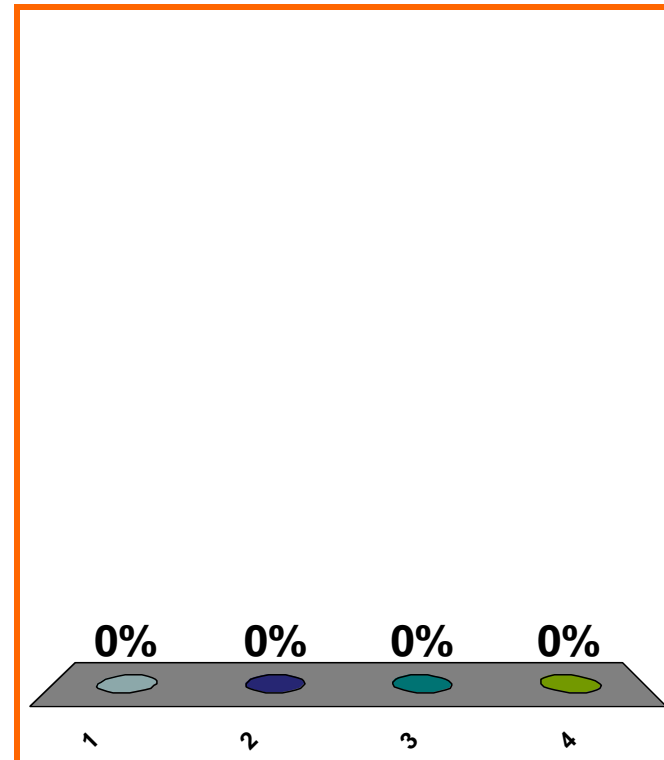
(a) $a - b$

(b) $b - a$

(c) $a + b$

(d) none of the above

Correct answer: $|a - b|$



1	2	3	4	5	6	7	8	9	10	11	12	13	14	15	16	17	18	19	20
21	22	23	24	25	26	27	28	29	30										

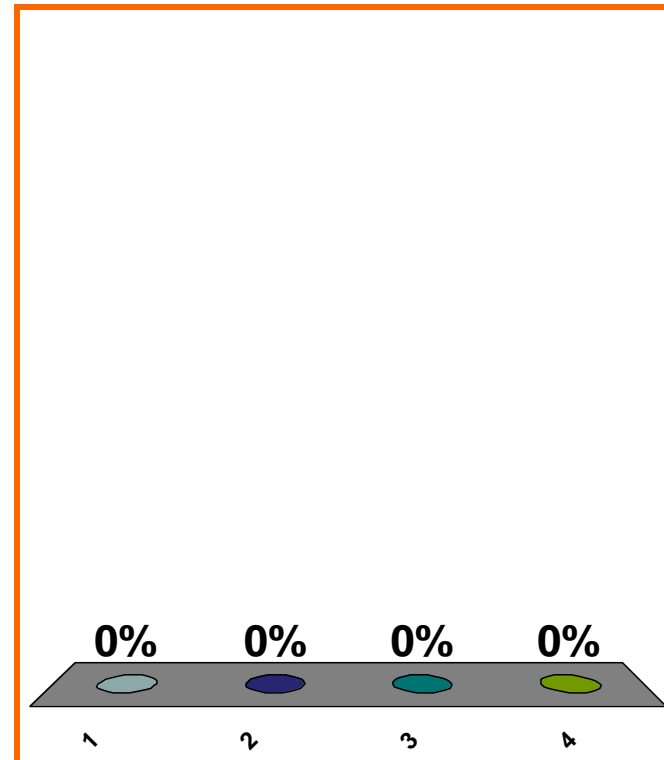
To get graph of $y^2 = \sin(x + \pi)$,
move graph of $y^2 = \sin(x)$...

(a) right π

(b) left π

(c) down π

(d) none of the above



1	2	3	4	5	6	7	8	9	10	11	12	13	14	15	16	17	18	19	20
21	22	23	24	25	26	27	28	29	30										

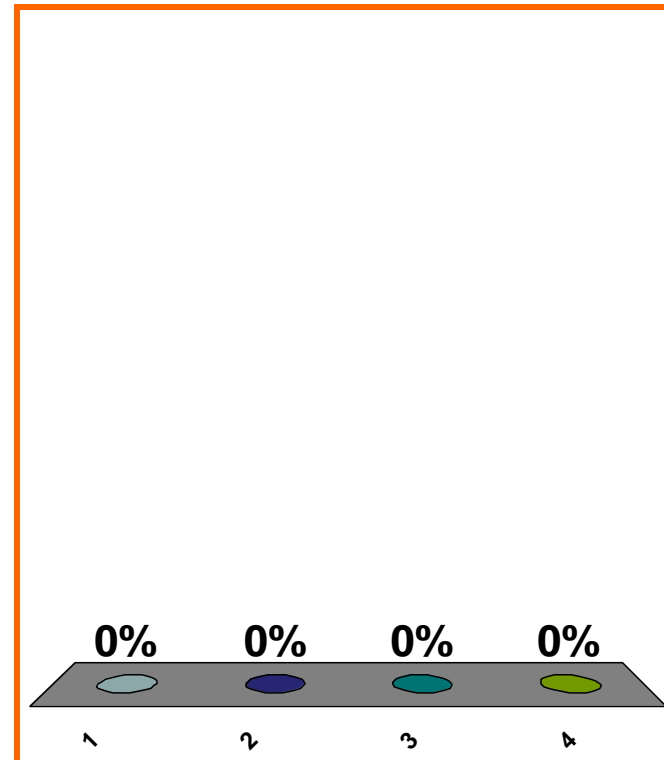
line's slope = 8
goes through (2, 7)
equation?

(a) $x - 7 = 8(y - 2)$

(b) $y - 7 = 8(x - 2)$

(c) $y - 8 = 7(x - 2)$

(d) none of the above



1	2	3	4	5	6	7	8	9	10	11	12	13	14	15	16	17	18	19	20
21	22	23	24	25	26	27	28	29	30										

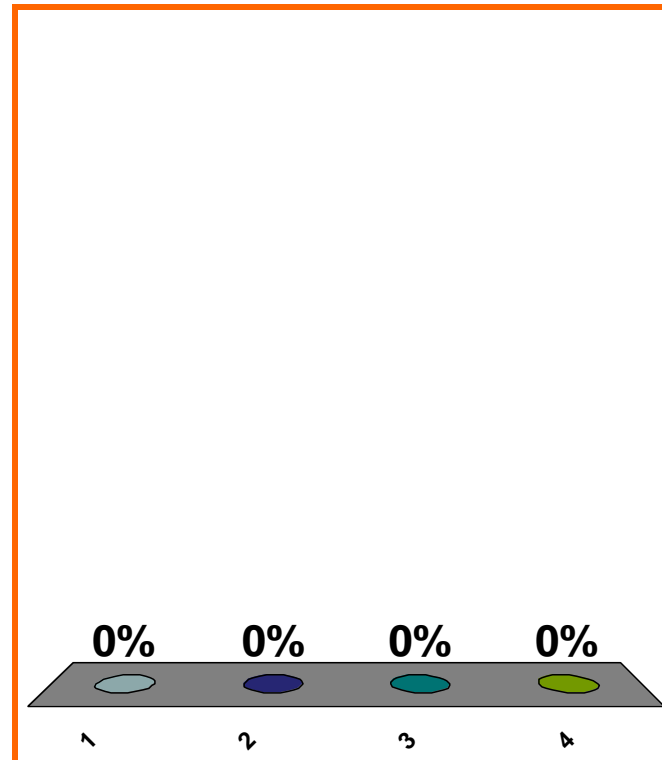
$$\sum_{j=2}^4 j^3 = ??$$

(a) $(2 + 3 + 4)^3$

(b) $(1 + 2 + 3 + 4)^3$

(c) $2^3 + 3^3 + 4^3$

(d) none of the above



1	2	3	4	5	6	7	8	9	10	11	12	13	14	15	16	17	18	19	20
21	22	23	24	25	26	27	28	29	30										

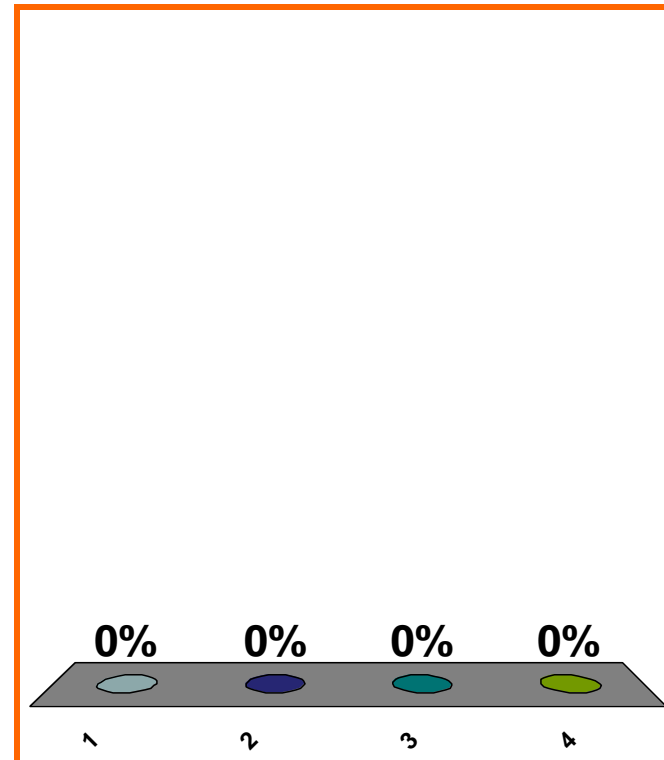
$$\sin(\pi/3) = ??$$

(a) $\sqrt{2}/2$

(b) $\sqrt{3}/2$

(c) $1/2$

(d) none of the above



1	2	3	4	5	6	7	8	9	10	11	12	13	14	15	16	17	18	19	20
21	22	23	24	25	26	27	28	29	30										

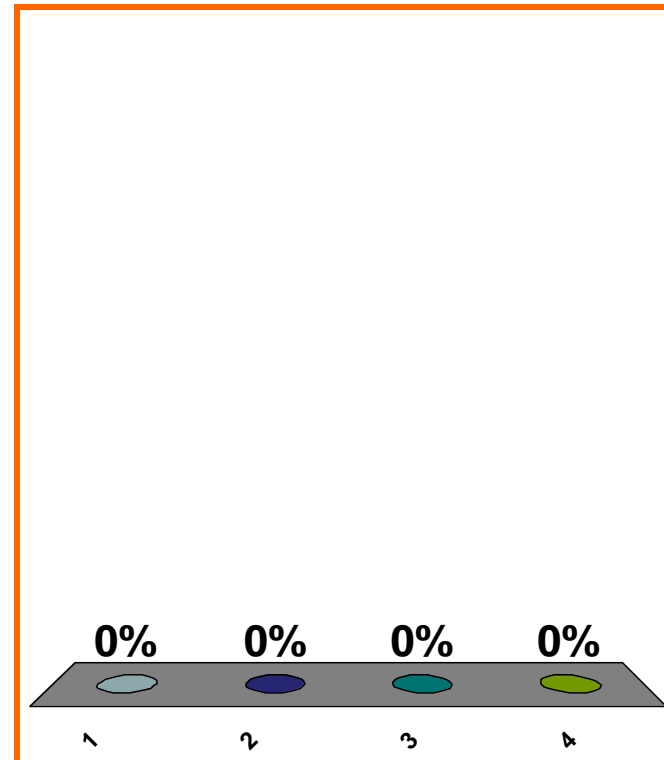
$$\arcsin(\sqrt{3}/2) = ??$$

(a) $\pi/3$

(b) $\pi/4$

(c) $\pi/6$

(d) none of the above



1	2	3	4	5	6	7	8	9	10	11	12	13	14	15	16	17	18	19	20
21	22	23	24	25	26	27	28	29	30										

0 of 5

Topic 0110

0 pts

34

from position 5 to position 9
from time 3 to time 11

average velocity = ??

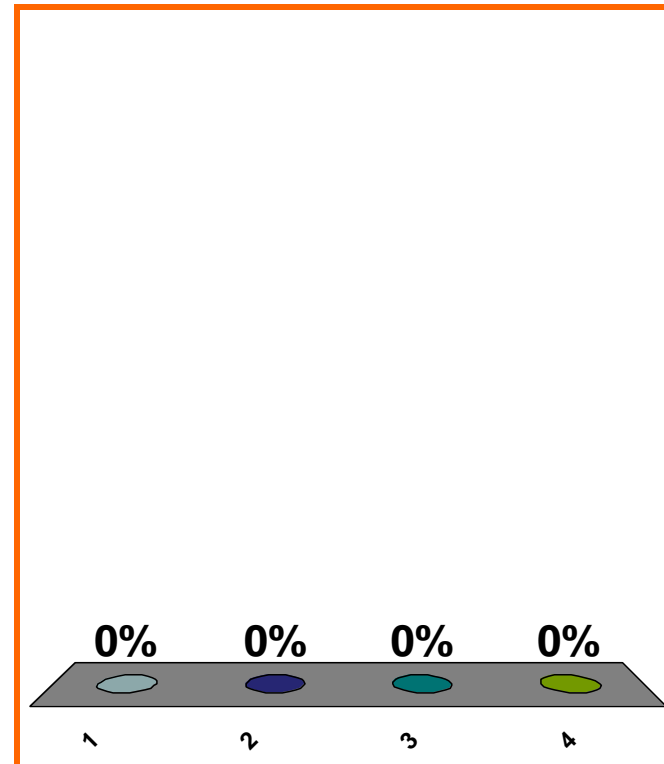
(a) 2

(b) 4

(c) 8

(d) none of the above

Correct answer: 1/2



1	2	3	4	5	6	7	8	9	10	11	12	13	14	15	16	17	18	19	20
21	22	23	24	25	26	27	28	29	30										

$$f(1) = 200$$
$$f(3) = 800$$

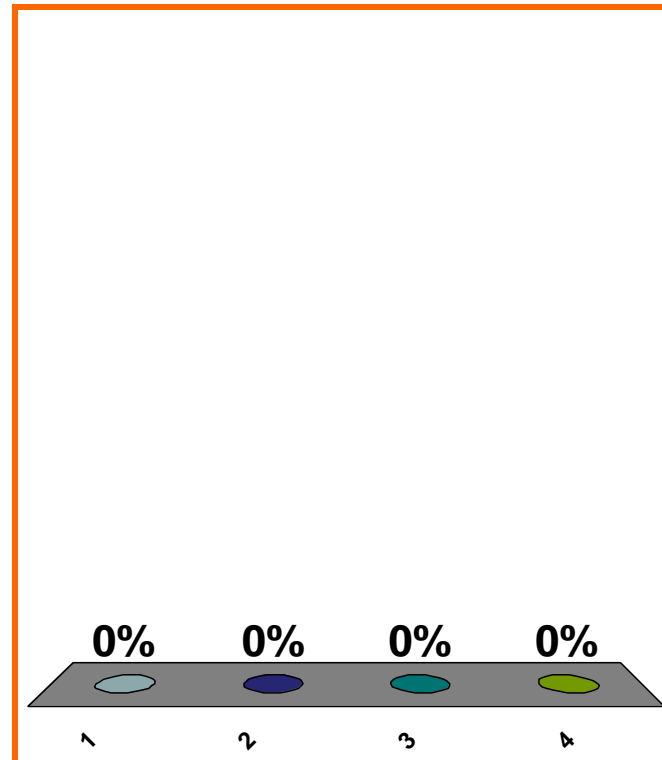
avg rate of change?

(a) $(800 - 200)/(3 - 1)$

(b) $(3 - 1)/(800 - 200)$

(c) $(200 - 800)/(3 - 1)$

(d) none of the above



1	2	3	4	5	6	7	8	9	10	11	12	13	14	15	16	17	18	19	20
21	22	23	24	25	26	27	28	29	30										

SAVE THE
SESSION
DATA

RETURN TO
PRESENTATION