

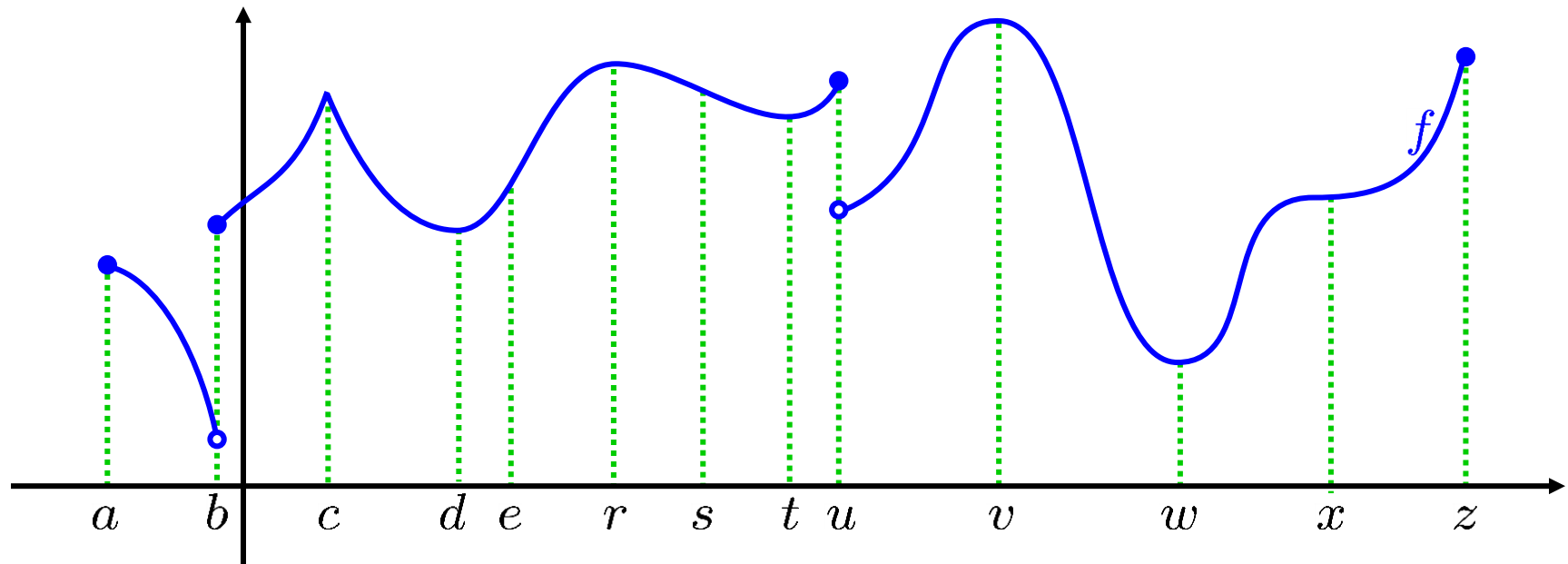
CALCULUS
Maxima and minima
OLD2

0450-1.a. **Sketch** the graph of a continuous function whose domain is $[2, \infty)$, and which has **exactly two** global minima, and **exactly one** local minimum.

b. **Sketch** the graph of a continuous function whose domain is $(2, 4]$, and which has **exactly two** local minima, and **no** global minima.

0450-2. Let $f : [a, z] \rightarrow \mathbb{R}$ be the function whose graph is shown below.

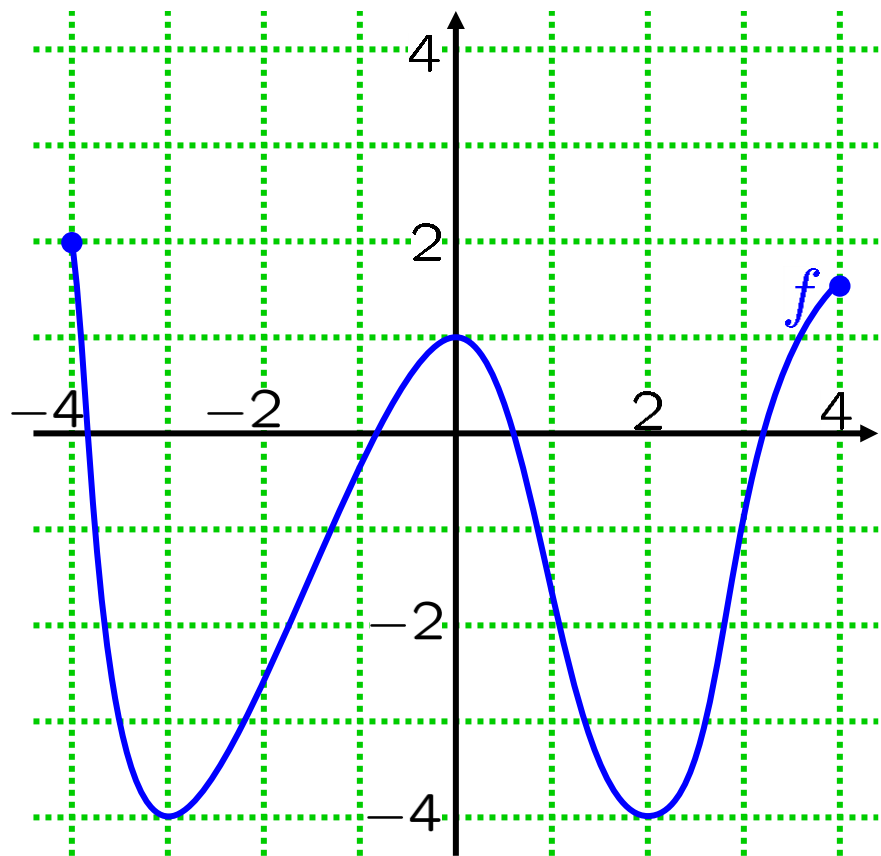
OLD2



- i. For each number $a, b, c, d, e, r, s, t, u, v, w, x, z$, state whether or not f has, at that number,
- a global maximum
 - a global minimum
 - a local maximum
 - a local minimum.
- ii. Which of $a, b, c, d, e, r, s, t, u, v, w, x, z$, is a critical number for f ?

0450-3. Let $f : [-4, 4] \rightarrow \mathbb{R}$ be the function whose graph is displayed below.

OLD2

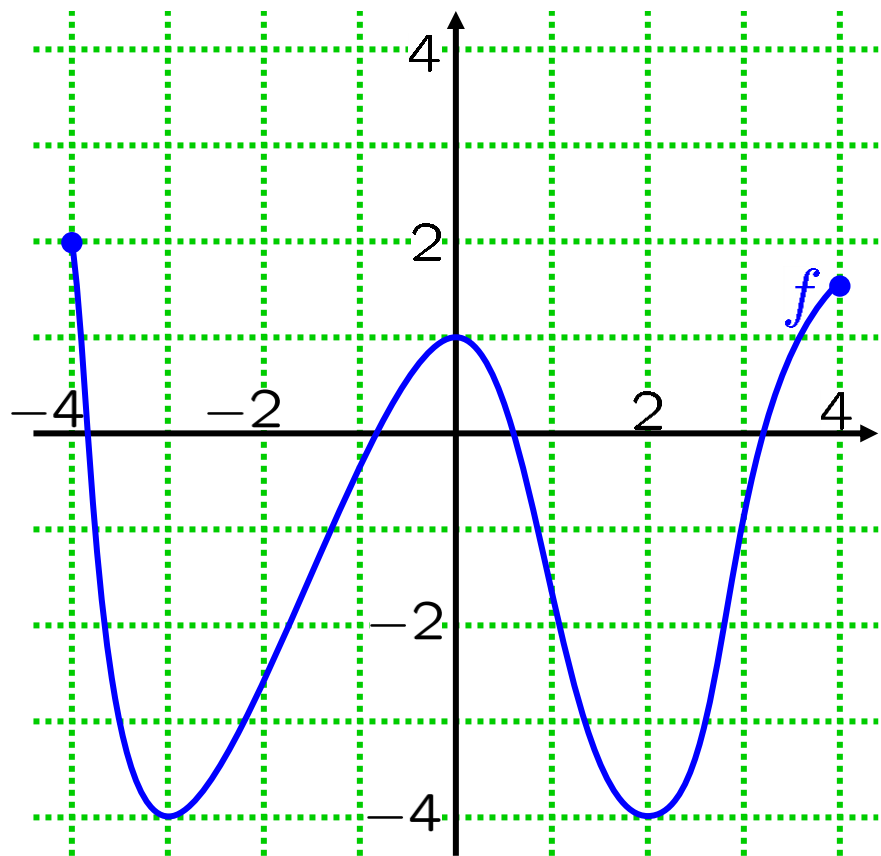


- At what numbers x does $f(x)$ have a local minimum?
- What are the corresponding local minimum values?
- At what numbers x does $f(x)$ have a local maximum?
- What are the corresponding local maximum values?



0450-4. Let $f : [-4, 4] \rightarrow \mathbb{R}$ be the function
whose graph is displayed below.

OLD2



a. At what numbers x does $f(x)$ have a global minimum?

b. What is the corresponding global minimum value?

c. At what numbers x does $f(x)$ have a global maximum?

d. What is the corresponding global maximum value?

0450-5.

OLD2

Sketch a graph of a continuous function whose domain is $(-3, 2)$ and which has
no global maxima,
two local maxima,
and two global minima.

0450-6.

OLD2

Sketch a graph of a function whose domain is $[1, 4]$, which is continuous on $[1, 4]$ and which has
two global maxima,
one local maximum
and two local minima.

OLD2 0450-7. Define $f : [-2, 2] \rightarrow \mathbb{R}$ by $f(x) = x^4$.

- a. Sketch the graph of f .
- b. Does f have a global maximum?
If so, at what number(s)?
- c. Does f have a global minimum?
If so, at what number(s)?
- d. Does f have a local maximum?
If so, at what number(s)?
- e. Does f have a local minimum?
If so, at what number(s)?
- f. What are the critical numbers of f ?

OLD2 0450-8. Define $f : (-2, 2) \rightarrow \mathbb{R}$ by $f(x) = x^4$.

- a. Sketch the graph of f .
- b. Does f have a global maximum?
If so, at what number(s)?
- c. Does f have a global minimum?
If so, at what number(s)?
- d. Does f have a local maximum?
If so, at what number(s)?
- e. Does f have a local minimum?
If so, at what number(s)?
- f. What are the critical numbers of f ?

0450-9. Define $f : [-2, 2] \rightarrow \mathbb{R}$ by $f(x) = x$.
OLD2

- a. Sketch the graph of f .
- b. Does f have a global maximum?
If so, at what number(s)?
- c. Does f have a global minimum?
If so, at what number(s)?
- d. Does f have a local maximum?
If so, at what number(s)?
- e. Does f have a local minimum?
If so, at what number(s)?
- f. What are the critical numbers of f ?

0450-10. Define $f : (-2, 2) \rightarrow \mathbb{R}$ by $f(x) = x$.
OLD2

- a. Sketch the graph of f .
- b. Does f have a global maximum?
If so, at what number(s)?
- c. Does f have a global minimum?
If so, at what number(s)?
- d. Does f have a local maximum?
If so, at what number(s)?
- e. Does f have a local minimum?
If so, at what number(s)?
- f. What are the critical numbers of f ?

0450-11. Define $f : (-2, 2) \rightarrow \mathbb{R}$ by
OLD2 $f(x) = 3 - 2x^2$.

- a. Sketch the graph of f .
- b. Does f have a global maximum?
If so, at what number(s)?
- c. Does f have a global minimum?
If so, at what number(s)?
- d. Does f have a local maximum?
If so, at what number(s)?
- e. Does f have a local minimum?
If so, at what number(s)?
- f. What are the critical numbers of f ?

0450-12. Define $f : [-2, 2] \rightarrow \mathbb{R}$ by
OLD2 $f(x) = 3 - 2x^2$.

- a. Sketch the graph of f .
- b. Does f have a global maximum?
If so, at what number(s)?
- c. Does f have a global minimum?
If so, at what number(s)?
- d. Does f have a local maximum?
If so, at what number(s)?
- e. Does f have a local minimum?
If so, at what number(s)?
- f. What are the critical numbers of f ?

0450-13. Find the critical numbers of
OLD2 $f(x) = 2x^3 + 3x^2 - 72x + 12.$

0450-14. Find the critical numbers of
OLD2 $f(x) = |x^2 - 10x + 21|.$

0450-15. Find the critical numbers of
OLD2 $f(x) = |x^2 - 2x + 1|.$

0450-16. Find the critical numbers of
OLD2 $f(x) = \cos x.$

0450-17. Find the critical numbers of
OLD2 $f(x) = |\cos x|.$

0450-18. Find the global maximum and minimum values of

OLD2

$$f(x) = x^3 - 15x^2 + 48x - 6$$

on $0 \leq x \leq 10$.

0450-19. Find the global maximum and minimum values of

OLD2

$$g(t) = \frac{3t}{t^2 + 9}$$

on $-5 \leq t \leq 5$.

0450-20. Find the global maximum and minimum values of

OLD2

$$H(s) = se^{-s^2/8}$$

on $-4 \leq s \leq 8$.