


Permafrost Response to Climate Change via Budyko's Model*


Richard McGehee
 School of Mathematics
 University of Minnesota
 Mathematics of Climate Seminar
 October 8, 2019



*Based on undergraduate projects by Aileen Zebrowski and John Nguyen.

Permafrost Response

What is permafrost?




<https://www.nps.gov/gaar/learn/nature/permafrost.htm>

Mathematics of Climate Seminar 10/08/2019

Permafrost Response

What is permafrost?




<https://climateculture.com/2016/08/28/satellite-remote-sensing-of-permafrost/>

Mathematics of Climate Seminar 10/08/2019

Permafrost Response

What is permafrost?




http://alaska.usgs.gov/science/interdisciplinary_science/cae/arctic_coastal_plain.php

Mathematics of Climate Seminar 10/08/2019

Permafrost Response

What is permafrost?



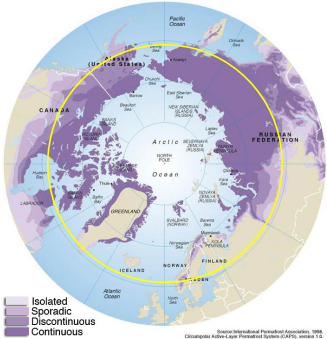
Washington Post, Oct 4, 2019: "In fast-thawing Siberia, radical warming is warping the earth"

Mathematics of Climate Seminar 10/08/2019


Permafrost Response

Where is the permafrost?

Average latitude of permafrost boundary: 61°
 (yellow circle)
 (Aileen Zebrowski)



Mathematics of Climate Seminar 10/08/2019



Permafrost Response

Potential Carbon Emissions

The National Snow and Ice Data Center estimates that there are **1400** Gigatonnes of carbon (GtC) stored in the permafrost.

By comparison, the atmosphere currently holds about **850** GtC.

<https://nsidc.org/cryosphere/frozenground/methane.html>

Mathematics of Climate Seminar 10/08/2019




Permafrost Response

Paris climate conference (COP21)



<http://www.abc.ca/radio/theurrent/a-special-edition-of-the-current-for-november-30-2-degrees-1.3343179>

Mathematics of Climate Seminar 10/08/2019




Permafrost Response

Paris climate conference (COP21)

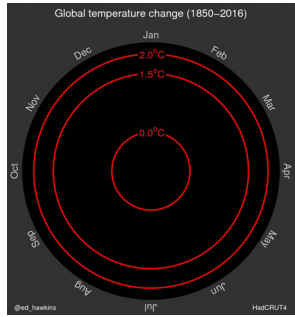


<http://www.npr.org/sections/thetwo-way/2015/12/12/459502597/2-degrees-100-billion-the-world-climate-agreement-by-the-numbers>

Mathematics of Climate Seminar 10/08/2019




Permafrost Response



<http://www.climate-lab-book.ac.uk/2016/spiralling-global-temperatures/>


Mathematics of Climate Seminar 10/08/2019



Permafrost Response

How much carbon would be released from the permafrost if the global mean temperature rose by 2 degrees Celsius?

Mathematics of Climate Seminar 10/08/2019



Permafrost Response

Conservation of Energy

temperature change ~ energy in – energy out

short wave energy from the Sun long wave energy from the Earth

Everything else is detail.

Mathematics of Climate Seminar 10/08/2019

Permafrost Response

Budyko's Equation

$$R \frac{\partial T}{\partial t} = Qs(y)(1 - \alpha(y)) - (A + BT) + C(\bar{T} - T)$$

Labels: surface temperature, heat capacity, insolation, albedo, OLR, heat transport, $\bar{T} = \int_0^1 T(y) dy$, $\sin(\text{latitude})$

Symmetry assumption: $0 \leq y = \sin(\text{latitude}) \leq 1$

Chylek and Coakley's quadratic approximation:
 $s(y) \approx 1 + s_2(3y^2 - 1)$, where $s_2 = -0.241$

Mathematics of Climate Seminar 10/08/2019

Permafrost Response

Budyko's Equation

$$R \frac{\partial T}{\partial t} = Qs(y)(1 - \alpha(y)) - (A + BT) + C(\bar{T} - T)$$

parameter	value	units
Q	343	Wm^{-2}
s_2	-2.41	dimensionless
A	202	Wm^{-2}
B	1.9	$\text{Wm}^{-2}\text{K}^{-1}$
C	3.04	$\text{Wm}^{-2}\text{K}^{-1}$
α_1	0.32	dimensionless
α_2	0.62	dimensionless
T_c	-10	$^{\circ}\text{C}$

K.K. Tung, *Topics in Mathematical Modeling*, Princeton University Press, 2007, Chapter 8.

Mathematics of Climate Seminar 1/24/2017

Permafrost Response

Insolation Distribution

green = quadratic approximation (Chylek & Coakley)
 fuchsia = formula using obliquity of 23.4°

Mathematics of Climate Seminar 10/08/2019

Permafrost Response

Equilibrium Temperature Profile

$$T(y) = \frac{1}{B+C} (Qs(y)(1 - \alpha(y)) - A + C\bar{T})$$

where $\alpha(y) = \begin{cases} \alpha_1 = 0.32, & y < \eta \\ \alpha_2 = 0.62, & y > \eta \end{cases}$ ← current ice boundary

global mean temperature $\bar{T} = \frac{1}{B} (Q(1 - \bar{\alpha}) - A)$, and $\bar{\alpha} = \int_0^1 \alpha(y)s(y)dy$ ← average albedo

$$T(y) = \begin{cases} \frac{1}{B+C} (Qs(y)(1 - \alpha_1) - A + C\bar{T}), & y < \eta \\ \frac{1}{B+C} (Qs(y)(1 - \alpha_2) - A + C\bar{T}), & y > \eta \end{cases}$$
 ← piecewise quadratic

Mathematics of Climate Seminar 10/08/2019

Permafrost Response

Equilibrium Temperature Profile

$T(y) = \frac{1}{B+C} (Qs(y)(1 - \alpha(y)) - A + C\bar{T})$

ice line

Mathematics of Climate Seminar 10/08/2019


Permafrost Response

Equilibrium Temperature Profile

permafrost temperature (0.74°)

permafrost boundary (61°)

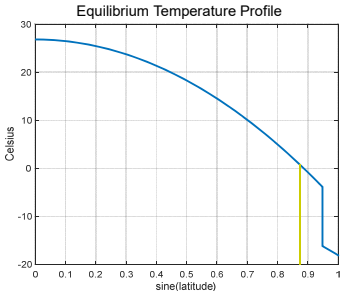
Mathematics of Climate Seminar 10/08/2019




Permafrost Response

If we raise the global mean temperature by 2°C, how will the permafrost boundary move?

First approximation: Raise the temperature profile by 2°, and use linear approximation to determine the latitude where the new temperature is the permafrost temperature.



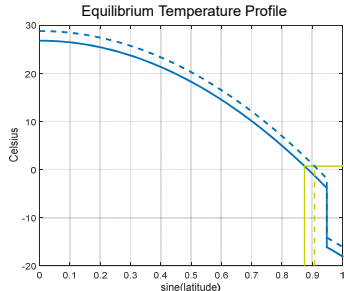
Mathematics of Climate Seminar 10/08/2019




Permafrost Response

If we raise the global mean temperature by 2°C, how will the permafrost boundary move?

First approximation: Raise the temperature profile by 2°, and use linear approximation to determine the latitude where the new temperature is the permafrost temperature.



Mathematics of Climate Seminar 10/08/2019



Permafrost Response

If we raise the global mean temperature by 2°C, how will the permafrost boundary move?

$$T(y) = \begin{cases} \frac{1}{B+C}(Qs(y)(1-\alpha_1) - A + C\bar{T}), & y < \eta, \\ \frac{1}{B+C}(Qs(y)(1-\alpha_2) - A + C\bar{T}), & y > \eta, \end{cases}$$

$$= \begin{cases} 26.85 - 34.13y^2, & y < 0.948, \\ 1.00 - 19.07y^2, & y > 0.948. \end{cases}$$

permafrost boundary: $y_p = \sin(61^\circ) \approx 0.875$


$$T'(y_p) = -68.26y_p = -59.70$$

$$\hat{T}(y) = T(y) + 2$$

$$T(y_p) = \hat{T}(y_p + \Delta y) \approx \hat{T}(y_p) + \hat{T}'(y_p)\Delta y = T(y_p) + 2 + T'(y_p)\Delta y$$

$$\Delta y \approx \frac{-2}{T'(y_p)} = \frac{-2}{-59.70} = 0.0335$$

Mathematics of Climate Seminar 10/08/2019



Permafrost Response

permafrost boundary: $y_p = \sin(61^\circ) \approx 0.875$

$$T'(y_p) = -68.26y_p = -59.70$$

$$\hat{T}(y) = T(y) + 2$$


$$\hat{T}(y_p) = \hat{T}(y_p + \Delta y) \approx \hat{T}(y_p) + \hat{T}'(y_p)\Delta y = T(y_p) + 2 + T'(y_p)\Delta y$$

$$\Delta y \approx \frac{-2}{T'(y_p)} = \frac{-2}{-59.70} = 0.0335$$

new permafrost boundary:
 $\hat{y}_p \approx 0.875 + 0.0335 \approx 0.908$

new permafrost boundary in degrees latitude:
 $\sin^{-1}(\hat{y}_p) \approx 65.2^\circ$ latitude

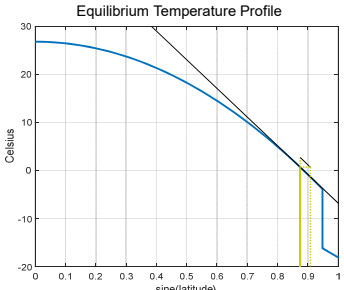
Mathematics of Climate Seminar 10/08/2019




Permafrost Response

If we raise the global mean temperature by 2°C, how will the permafrost boundary move?

First approximation: Raise the temperature profile by 2°, and use linear approximation to determine the latitude where the new temperature is the permafrost temperature.



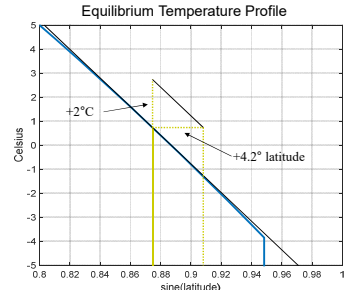
Mathematics of Climate Seminar 10/08/2019




Permafrost Response

If we raise the global mean temperature by 2°C, how will the permafrost boundary move?

First approximation: Raise the temperature profile by 2°, and use linear approximation to determine the latitude where the new temperature is the permafrost temperature.



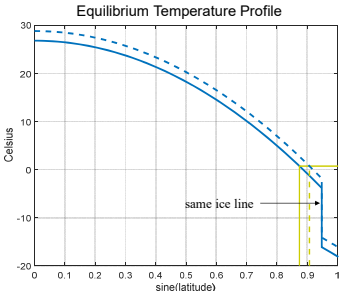
Mathematics of Climate Seminar 10/08/2019



Permafrost Response


If we raise the global mean temperature by 2°C, how will the permafrost boundary move?

We have not taken into account that the ice line might move.



Equilibrium Temperature Profile

Mathematics of Climate Seminar 10/08/2019



Permafrost Response

Global Mean Temperature

$$\bar{T}(\eta) = \frac{1}{B} (Q(1 - \bar{\alpha}(\eta)) - A), \text{ where } \bar{\alpha}(\eta) = \int_0^1 \alpha(y, \eta) s(y) dy,$$

where $\alpha(y) = \begin{cases} \alpha_1 = 0.32, & y < \eta, \\ \alpha_2 = 0.62, & y > \eta, \end{cases}$ ← ice line

The ice line is determined by the assumption that the average temperature across the ice line is T_c , usually take to be -10°C . This condition reduces to*


$$\frac{1}{B+C} (Qs(\eta)(1 - \alpha_0) - A + C\bar{T}(\eta)) = T_c, \text{ where } \alpha_0 = \frac{1}{2}(\alpha_1 + \alpha_2)$$

← outgoing long wave radiation varies with greenhouse gases.

$$h(\eta, A) = \frac{1}{B+C} (Qs(\eta)(1 - \alpha_0) - A + \frac{C}{B} (Q(1 - \bar{\alpha}(\eta)) - A)) - T_c = 0$$

*e.g., McGehee & Widiashih 2014, *SIAM J. Applied Dynamical Systems* 13, pp 518-536.

Mathematics of Climate Seminar 10/08/2019




Permafrost Response

How to Proceed?

1. Determine how the ice line varies with the parameter A .
2. Determine the change in A giving an increase of 2 degrees Celsius in the global mean temperature.
3. Determine the change in the location of the permafrost boundary given the change in A .

Mathematics of Climate Seminar 10/08/2019



Permafrost Response

Step 1

Solve for η as a function of A :

$$h(\eta, A) = \frac{1}{B+C} (Qs(\eta)(1 - \alpha_0) - A + \frac{C}{B} (Q(1 - \bar{\alpha}(\eta)) - A)) - T_c = 0,$$

where

$$\bar{\alpha}(\eta) = \int_0^\eta \alpha_1 s(y) dy + \int_\eta^1 \alpha_2 s(y) dy$$

$$= \alpha_1 \int_0^\eta s(y) dy + \alpha_2 \left(1 - \int_0^\eta s(y) dy \right) = \alpha_2 - (\alpha_2 - \alpha_1) \int_0^\eta s(y) dy$$


Numerically,

$$h(\eta, A) = h_0(\eta) - 0.5236A, \text{ where } h_0(\eta) = -8.0309\eta^3 - 26.6024\eta^2 + 41.3542\eta + 97.8714$$

$$h'_0(\eta) \frac{d\eta}{dA} - 0.5236 = 0$$

Evaluate at $\eta = 0.9483$: $\frac{d\eta}{dA} = \frac{0.5236}{-30.7672} = -0.0171$ $\frac{d\eta}{dA} = -0.0171$

Mathematics of Climate Seminar 10/08/2019



Permafrost Response

Step 2

Compute $\frac{d\bar{T}}{dA}$:

$$\bar{T}(\eta, A) = \frac{1}{B} (Q(1 - \bar{\alpha}(\eta)) - A), \text{ where } \bar{\alpha}(\eta) = \alpha_2 - (\alpha_2 - \alpha_1) \int_0^\eta s(y) dy$$

$$\frac{d\bar{T}}{dA} = \frac{\partial \bar{T}}{\partial \eta} \frac{d\eta}{dA} + \frac{\partial \bar{T}}{\partial A} = -\frac{Q}{B} \bar{\alpha}'(\eta) \frac{d\eta}{dA} - \frac{1}{B} = \frac{Q}{B} (\alpha_2 - \alpha_1) s(\eta) \frac{d\eta}{dA} - \frac{1}{B}$$


Evaluate at $\eta = 0.9483$: $\frac{d\bar{T}}{dA} = -1.09172$

Change in A to increase T by 2 degrees:

$$\Delta A \approx \frac{\Delta T}{\frac{d\bar{T}}{dA}} = \frac{2}{-1.09172} = -1.832$$

$\Delta A \approx -1.832$

Mathematics of Climate Seminar 10/08/2019



Permafrost Response

Step 3

Compute the change in y_p :

current temperature profile $T(y) = \frac{1}{B+C} (Qs(y)(1 - \alpha_1) - A + C\bar{T}), \quad y < \eta$ $\Delta \bar{T} = 2$

$$= 26.85 - 34.13y^2$$

$\Delta A \approx -1.832$

new temperature profile $\hat{T}(y) = \frac{1}{B+C} (Qs(y)(1 - \alpha_1) - (A + \Delta A) + C(\bar{T} + \Delta \bar{T}))$

$$= \frac{1}{B+C} (Qs(y)(1 - \alpha_1) - A + C\bar{T}) + \frac{C\Delta \bar{T} - \Delta A}{B+C}$$

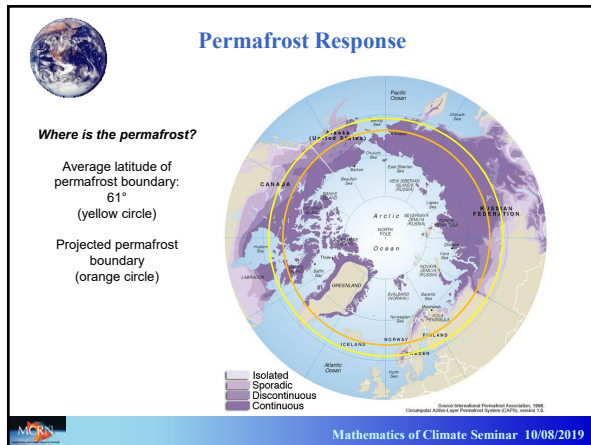
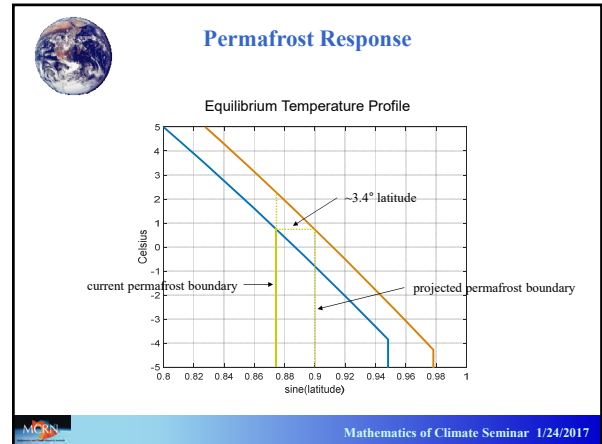
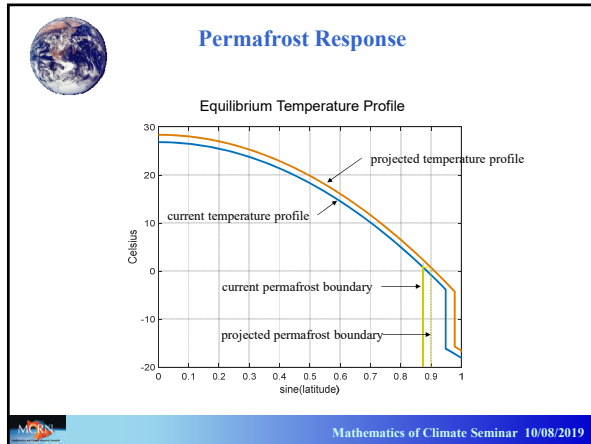
$$= T(y) + 1.60$$

$y_p = \sin(61^\circ) \approx 0.875$ permafrost boundary

$\Delta y \approx \frac{-1.60}{T'(y_p)} = \frac{-1.60}{-59.70} = 0.027$ as before, but with 1.6 instead of 2

new permafrost boundary $\hat{y}_p = y_p + \Delta y = 0.902$, corresponding to 64.4° latitude

Mathematics of Climate Seminar 10/08/2019



Permafrost Response

How much carbon would be released from the permafrost if the global mean temperature rose by 2 degrees Celsius?

Recall that the surface area is proportional to y , the sine of the latitude.

Current permafrost boundary: $y_p = \sin(61^\circ) \approx 0.875$

Proportion of globe cover by permafrost: $1 - y_p = 0.125$

$\Delta y \approx 0.027$

Proportion of permafrost melted: $\frac{0.027}{0.125} = 0.216$

Amount of carbon released: $0.216 \times 1400 = 302 \text{ GtC}$

Total fossil fuel emissions since 1751: 375 GtC

To hold the GMT at 2°C, we will have to withdraw 300 GtC from the atmosphere as the permafrost melts.

Mathematics of Climate Seminar 10/08/2019

Permafrost Response

Future Projects


Budyko's model includes ice-albedo feedback, but not carbon feedback.


- Can we modify the model to include the effects of permafrost melt on atmospheric carbon?
- Could we use the data we have about current permafrost to model the glacial retreats during the Pleistocene?*
- To what extent was the "dead ice" in the Holocene similar to today's permafrost?*

*e.g., J.A. Walsh, E. Widiastih, J. Hahn & R. McGehee, *Nonlinearity* 29, 1843-1864 (2016).

**H. Wright & I. Stefanova, *Acta Palaeobotanica* 44, 141-146 (2004).


Mathematics of Climate Seminar 10/08/2019





 **Permafrost Response**
Future Projects


- Could we use the data we have about current permafrost to model the glacial retreats during the Pleistocene?
- To what extent was the “dead ice” in the Holocene similar to today’s permafrost?
- Can the ^{13}C data be reconciled with the Budyko model?
 - How fast will the permafrost melt?*


**Ask Kaitlin Hill*


 Mathematics of Climate Seminar 10/08/2019


 **Permafrost Response**
Siberian Permafrost Sinkhole



 Mathematics of Climate Seminar 10/08/2019

 **Permafrost Response**
Siberian Permafrost Sinkhole





 Mathematics of Climate Seminar 10/08/2019

 **Permafrost Response**
Glacial Lake Agassiz





http://www.rootsweb.ancestry.com/~ndpemin/html/lake_agassiz.htm

 Mathematics of Climate Seminar 10/08/2019

 **Permafrost Response**

Could this be a picture of the North shore of Lake Agassiz?



 Mathematics of Climate Seminar 10/08/2019